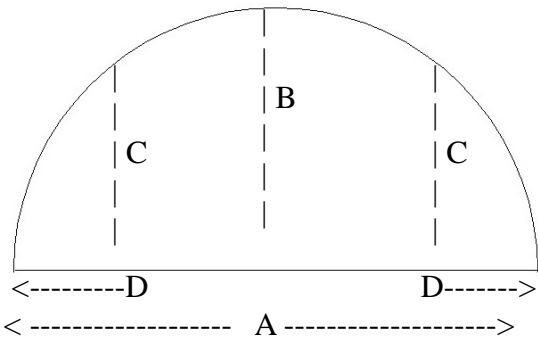
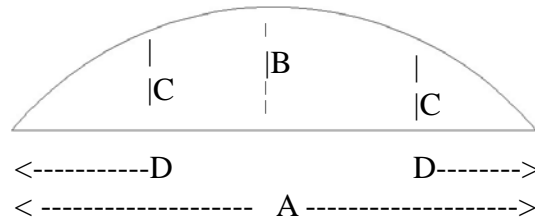


1) ARCH - True 1/2 Circle & Eyebrow

Elevation Drawing



Eyebrow



Provide Inside Measurements

Horizontal A = _____ Center Rise B = _____ Mid Rise C = _____

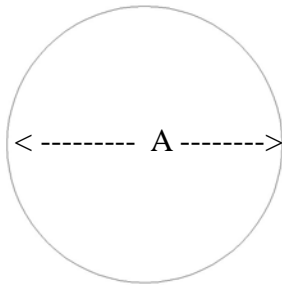
D = Distance to Side from C _____ Number of Arches: _____

2) CIRCLE

Diameter A _____

or Circumference _____

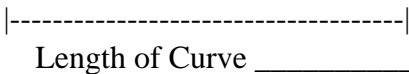
of Circles _____



3) CURVED WALL Plan View Drawings



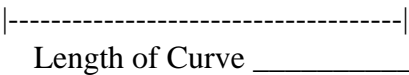
A = Depth = _____



Length of Curve _____



A = Depth = _____



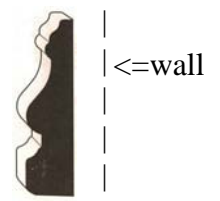
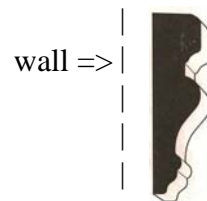
Length of Curve _____

4) STRAIGHT LENGTHS

Total Feet (Meters)

Required: _____

5) ORIENTATION circle one



Imperial Productions®

1-800-399-7585

Imperial Productions & Distribution Inc Toronto / New York

email sales@imperialproductions.com copyright 2016 MRDCI All Rights Reserved

JAN-2019