
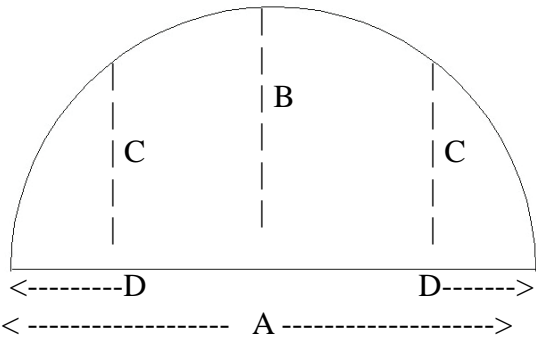




1) ARCH - True 1/2 Circle & Eyebrow Elevation Drawing

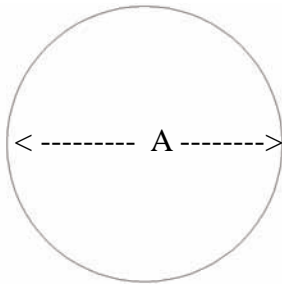


Width 1-15/16" (4.94cm)

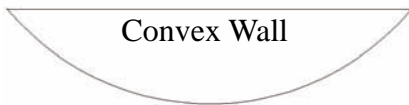
Projection
1-1/16"
2.7cm

2) CIRCLE

Diameter A _____
 or Circumference _____
 # of Circles _____

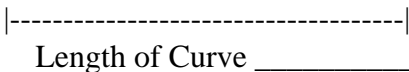


3) CURVED WALL Plan View Drawings



Convex Wall

A = Depth = _____

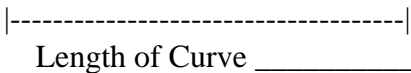


Length of Curve _____



Concave Wall

A = Depth = _____



Length of Curve _____

4) STRAIGHT LENGTHS

Total Feet (Meters)

Required: _____





Download & Fill-In Form

Name / Company: _____

Phone _____ Email _____

Billing Address: _____

City: _____ Prov / State _____

PC / Zip Code _____

Ship to Address: _____

City: _____ Prov / State _____

PC / Zip Code _____

Product Code: _____

Quantity: _____

Notes: _____

Fill-in & Email to sales@imperialproductions.com

